

# Class 1 - Laplace equation in Cartesian and spherical coordinate systems

## Class material

### Exercise 1.1 - Semi-infinite rectangle

On the boundary of a two-dimensional semi-infinite rectangle the potential is fixed as shown on Fig.1. Compute the electric potential and the electric field inside the rectangle.

- Write down the Laplace equation for the potential in two dimensions, and specify the corresponding boundary conditions.
- Using the separation of variables in Cartesian coordinates, reduce the Laplace equation to ordinary differential equations.
- Solve the equations and impose the boundary conditions.
- Determine the electric field from the potential.

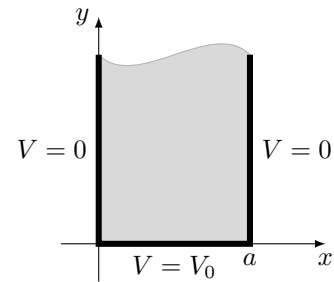


Figure 1

### Exercise 1.2 - Charged sphere with azimuthal symmetry

Consider a sphere with radius  $R$  and surface charge density  $\sigma = \sigma_0 \cos \theta$ . Compute the electric potential and the electric field in the whole space.

- Write down the Laplace equation in spherical coordinates using the azimuthal symmetry and the boundary conditions for the potential.
- Determine the expansion coefficients from the boundary conditions.
- Determine the electric field from the potential.

### Exercise 1.3 - Square tube-I

Consider an infinitely long metal tube along direction  $z$  of square cross section with sides of length  $a$ . The side walls are insulated from each other along the edges. We connect the opposite sides to each other; one pair is grounded, while the other is kept at a potential  $V = V_0$  as shown in Fig.2.

- Write the Laplace equation for the electrostatic field inside the tube in a suitable coordinate system.
- Specify the corresponding boundary conditions, and write down the required orthogonality relations.
- Determine the electrostatic potential inside the tube.
- Determine the electrostatic field inside the tube.

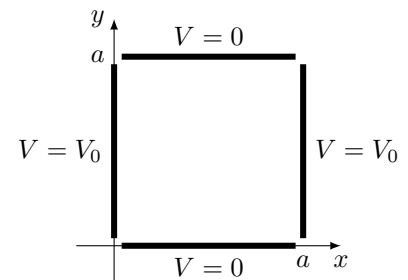


Figure 2

**Exercise 1.4 - Infinite planes with alternating potential**

Consider two parallel conducting planes at distance  $h$ , positioned at  $z = 0$  and  $z = h$  respectively. The one at  $z = h$  is on zero potential, while the one at  $z = 0$  is sliced into stripes of width  $b$  parallel to the  $x$  axis, which are insulated from each other, and then impose an alternating potential  $\pm V_0$  as illustrated in Fig.3.

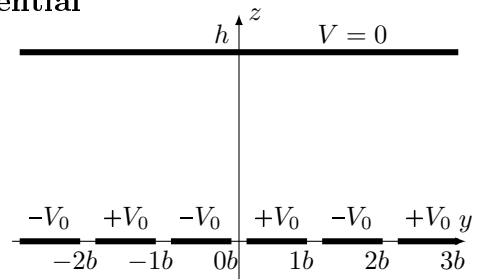


Figure 3

- (a) Compute the electrostatic potential  $\Phi(x, y, z)$  between the planes.
- (b) Determine the  $\vec{E}$  electric field along the  $z$  axis in the  $0 \leq z \leq h$  range.

**Exercise 1.5 - Sphere with azimuthal symmetry**

Consider a sphere with radius  $R$ , for which on the surface of the upper semi-sphere the potential is held at  $V_0$ , while the lower is held at  $-V_0$ . Compute the electric potential and the electric field in the whole space.

- (a) Write down the Laplace equation in spherical coordinates using the azimuthal symmetry and the boundary conditions for the potential.
- (b) Determine the expansion coefficients from the boundary conditions.
- (c) Determine the electric field from the potential.

## Homework

*The following problems (marked with an asterisk) form the basis of the short test at the beginning of the next class.*

### Exercise 1.6 - Infinite planes\*

Consider two infinite charged metallic planes parallel to the  $xy$  plane, one at  $z = 0$  and the other at  $z = 0.4$ . The potential on the planes in some arbitrary units is:

$$\begin{aligned}\Phi(x, y, 0) &= 5 \sin(4x) \cos(3y) \\ \Phi(x, y, 0.4) &= 2 \sin(4x) \cos(3y)\end{aligned}$$

- (a) Write the Laplace equation for the electrostatic field between the two planes in a suitable coordinate system, and specify the corresponding boundary conditions.
- (b) Determine the electric potential  $\Phi(x, y, z)$  between the planes.

### Exercise 1.7 - Square tube-II\*

Consider an infinitely long metal tube along direction  $z$  of square cross section with sides of length  $a$ . One of the side walls given by  $y = a$  equation is insulated from the other sides and is held at a potential  $V_0$  potential, while 'U' formed by the other three sides is grounded as shown on Fig.4.

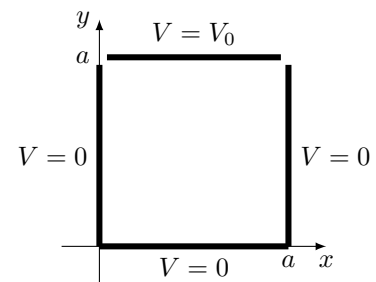


Figure 4

- (a) Write the Laplace equation for the electrostatic field inside the tube in a suitable coordinate system.
- (b) Specify the corresponding boundary conditions, and write down the required orthogonality relations.
- (c) Determine the electrostatic potential inside the tube.
- (d) Determine the electrostatic field inside the tube. What is the value at the middle?

### Exercise 1.8 - Charged infinite plane\*

The surface electric charge density on an infinite plane lying at  $z = 0$  is:

$$\sigma(x, y) = \sigma_0 \sin(\alpha x) \sin(\beta y)$$

- (a) Write the Laplace equation in a suitable coordinate system for the region  $z > 0$ , and specify the corresponding boundary conditions.
- (b) Determine the electric potential  $\Phi(x, y, z)$  in the region  $z > 0$ .

*These problems are for further practice and to have some fun!*

### Exercise 1.9 - Two concentric spheres (Jackson 3.1)

Two concentric spheres have radii  $a, b$  ( $a < b$ ) and each is divided into two hemispheres by the same horizontal plane. The upper hemisphere of the inner sphere and the lower hemisphere of the outer sphere are maintained at potential  $V$ . The other hemispheres are at zero potential.

Determine the potential in the region  $a \leq r \leq b$  as a series in Legendre polynomials. Include terms at least up to  $\ell = 4$ . Check your solution against known results in the limiting cases  $b \rightarrow \infty$ , and  $a \rightarrow a$ .

**Exercise 1.10 - Sphere with a neutral cap (Jackson 3.2)**

A spherical surface of radius  $R$  has charge uniformly distributed over its surface with density  $Q/4\pi R^2$ , except for a spherical cap at the north pole, defined by the cone  $\theta = \alpha$ .

- (a) Show that the potential inside the spherical surface can be expressed as

$$\Phi = \frac{Q}{8\pi\epsilon_0} \sum_{\ell=0}^{\infty} \frac{1}{2\ell+1} [P_{\ell+1}(\cos \alpha) - P_{\ell-1}(\cos \alpha)] \frac{r^\ell}{R^{\ell+1}} P_\ell(\cos \theta)$$

where, for  $\ell = 0$ ,  $P_{\ell-1}(\cos \alpha) = -1$ . What is the potential outside?

- (b) Find the electric field vector at the origin.
- (c) Discuss the limiting forms of the potential from part (a) and the electric field from part (b) as the spherical cap becomes (1) very small, and (2) so large that the area with charge on it becomes a very small cap at the south pole.

**Exercise 1.11 - Circular disc held at a fixed potential (Jackson 3.3)**

A thin, flat, conducting, circular disc of radius  $R$  is located in the  $x - y$  plane with its center at the origin and is maintained at fixed potential  $V$ . With the information that the charge density on a disc at fixed potential is proportional to  $(R^2 - \rho^2)^{-1/2}$ , where  $\rho$  is the distance out from the center of the disc.

- (a) Show that for  $r > R$  the potential is

$$\Phi(r, \theta, \phi) = \frac{2V R}{\pi r} \sum_{\ell=0}^{\infty} \frac{(-1)^\ell}{2\ell+1} \left(\frac{R}{r}\right)^{2\ell} P_{2\ell}(\cos \theta)$$

- (b) Find the potential for  $r < R$ .
- (c) What is the capacitance of the disc?

**Exercise 1.12 - Sphere with wedges kept at alternating potential (Jackson 3.4)**

The surface of a hollow conducting sphere of inner radius  $a$  is divided into an *even number* of equal segments by a set of planes; their common line of intersection is the  $z$  axis and they are distributed uniformly in the angle  $\phi$ . (The segments are like the skin on wedges of an apple, or the earth's surface between successive meridians of longitude.) The segments are kept at fixed potentials  $\pm V$ , alternately.

- (a) Set up a series representation for the potential inside the sphere for the general case of  $2n$  segments, and carry the calculation of the coefficients in the series far enough to determine exactly which coefficients are different from zero. For the nonvanishing terms, exhibit the coefficients as an integral over  $\cos \theta$ .
- (b) For the special case of  $n = 1$  (two hemispheres) determine explicitly the potential up to and including all terms with  $\ell = 3$ . By a coordinate transformation verify that this reduces to

$$\Phi(r, \theta) = V \left[ \frac{3r}{2a} P_1(\cos \theta) - \frac{7}{8} \left(\frac{r}{a}\right)^3 P_3(\cos \theta) + \frac{11}{16} \left(\frac{r}{a}\right)^5 P_5(\cos \theta) \dots \right]$$

where we cutted the sphere horizontally.

**Exercise 1.13 - Line charge inside a conducting sphere (Jackson 3.14)**

A line charge of length  $2d$  with a total charge  $Q$  has a linear charge density varying as  $(d^2 - z^2)$ , where  $z$  is the distance from the midpoint. A grounded, conducting, spherical shell of inner radius  $b > d$  is centered at the midpoint of the line charge.

- (a) Find the potential everywhere inside the spherical shell as an expansion in Legendre polynomials.

- (b) Calculate the surface-charge density induced on the shell.  
 (c) Discuss your answers to parts (a) and (b) in the limit that  $d \ll b$ .

### Exercise 1.14 - Green's function for a square (Jackson 2.15)

- (a) Show that the Green's function  $G(x, y; x', y')$  appropriate for Dirichlet boundary conditions for a square two-dimensional region,  $0 \leq x \leq 1$ ,  $0 \leq y \leq 1$ , has an expansion

$$G(x, y; x', y') = 2 \sum_{n=1}^{\infty} g_n(y, y') \sin(n\pi x) \sin(n\pi x')$$

where  $g_n(y, y')$  satisfies

$$\left( \frac{\partial^2}{\partial y'^2} - n^2 \pi^2 \right) g_n(y, y') = -4\pi \delta(y' - y) \quad \text{and} \quad g_n(y, 0) = g_n(y, 1) = 0$$

- (b) Taking for  $g_n(y, y')$  appropriate linear combinations of  $\sinh(n\pi y')$  and  $\cosh(n\pi y')$  in the two regions  $y' < y$  and  $y' > y$ , in accord with the boundary conditions and the discontinuity in slope required by the source delta function, show that the explicit form of  $G$  is

$$G(x, y; x', y') = 8 \sum_{n=1}^{\infty} \frac{1}{n \sinh(n\pi)} \sin(n\pi x) \sin(n\pi x') \sinh(n\pi y_{<}) \sinh(n\pi(1 - y_{>}))$$

where  $y_{<}(y_{>})$  is the smaller (larger) of  $y$  and  $y'$ .

### Exercise 1.15 - Potential of a square from the Green's function (Jackson 2.16)

A two dimensional potential exists on a unit square area ( $0 \leq x \leq 1$ ,  $0 \leq y \leq 1$ ) bounded by 'surfaces' held at zero potential. Over the entire square there is a uniform charge density of unit strength (per unit length in  $z$ ). Using the Green's function of Exercise 1.14, show that the solution can be written as

$$\Phi(x, y) = \frac{4}{\pi^2 \epsilon_0} \sum_{m=0}^{\infty} \frac{\sin[(2m+1)\pi x]}{(2m+1)^3} \left\{ 1 - \frac{\cosh[(2m+1)\pi(y-1/2)]}{\cosh[(2m+1)\pi/2]} \right\}$$

### Exercise 1.16 - Oppositely charged conducting hemispheres (Jackson 2.22)

- (a) Show that, for oppositely charged conducting hemispherical shells separated by a tiny gap, the interior potential ( $r < a$ ) in the  $z$  axis is

$$\Phi_{\text{in}}(z) = V \frac{a}{z} \left[ 1 - \frac{a^2 - z^2}{a\sqrt{a^2 + z^2}} \right]$$

Find the first few terms of the expansion in powers of  $z$  and show that they agree with

$$\Phi(x, \theta, \phi) = \frac{3Va^2}{2x^2} \left[ \cos\theta - \frac{7a^2}{12x^2} \left( \frac{5}{2} \cos^3\theta - \frac{3}{2} \cos\theta \right) \dots \right]$$

with the appropriate substitutions.

- (b) From the result of part (a) show that the radial electric field on the positive  $z$  axis is

$$E_r(z) = \frac{Va^2}{(z^2 + a^2)^{3/2}} \left( 3 + \frac{a^2}{z^2} \right)$$

for  $z > a$ , and

$$E_r(z) = -\frac{V}{a} \left[ \frac{3 + (a/z)^2}{(1 + (z/a)^2)^{3/2}} - \frac{a^2}{z^2} \right]$$

for  $|z| < a$ . Show that the second form is well behaved at the origin, with the value,  $E_r(a) = -3V/2a$ . Show that at  $z = a$  (north pole inside) it has the value  $-(\sqrt{2} - 1)V/a$ . Show that the radial field at the north pole outside has the value  $\sqrt{2}V/a$ .

- (c) Make a sketch of the electric field lines, both inside and outside the conducting hemispheres, with directions indicated. Make a *plot* of the radial electric field along the  $z$  axis from  $z = -2a$  to  $z = 2a$ .

### Exercise 1.17 - Simplified model of a battery (Jackson 3.15)

Consider the following ‘spherical cow’ model of a battery connected to an external circuit. A sphere of radius  $a$  and conductivity  $\sigma$  is embedded in a uniform medium of conductivity  $\sigma'$ . Inside the sphere there is a uniform (chemical) force in the  $z$  direction acting on the charge carriers; its strength as an effective electric field entering Ohm’s law is  $F$ . In the steady state, electric fields exist inside and outside the sphere and surface charge resides on its surface.

- (a) Find the electric field (in addition to  $F$ ) and current density everywhere in space. Determine the surface-charge density and show that the electric dipole moment of the spheres is  $\rho = 4\pi\epsilon_0\sigma a^3 F/(\sigma + 2\sigma')$ .
- (b) Show that the total current flowing out through the upper hemisphere of the sphere is

$$I = \frac{2\sigma\sigma'}{\sigma + 2\sigma'} \cdot \pi a^2 F$$

Calculate the total power dissipated outside the sphere. Using the lumped circuit relations,  $P = I^2 R_e = IV_e$ , find the effective external resistance  $R_e$  and voltage  $V_e$ .

- (c) Find the power dissipated within the spheres and deduce the effective internal resistance  $R_i$  and voltage  $V_i$ .
- (d) Define the total voltage through the relation  $V_t = (R_e + R_i)I$  and show that  $V_t = 4aF/3$ , as well as  $V_e + V_i = V_t$ . Show that  $IV_t$  is the power supplied by the ‘chemical’ force.

Reference: W.M. Saslow, *Am. J. Phys.* **62**, 495-501 (1994).